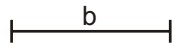
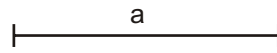


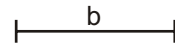
$a+b$



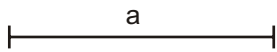
\_\_\_\_\_



$a-b$




\_\_\_\_\_




$ax4$

\_\_\_\_\_



Dividir el segmento  $a$  en dos partes iguales (mediatriz).

Dividir el segmento  $a$  en cinco partes iguales (teorema de Tales).



Título:

Fecha:

Calificación

Nombre y apellidos:

Grupo: